



I. Choose and circle the correct answer.

- 1) A rough drawing of a place is called a _____.
- (a) directions (b) landmark (c) scale (d) sketch
- 2) Explanation of symbols on a map is called a _____.
- (a) key (b) symbol (c) direction (d) scale
- 3) A _____ is a sign representing a landmark.
- (a) map (b) sketch (c) symbol (d) key
- 4) The colour green is used to indicate _____ on the map.
- (a) snow (b) mountains (c) water bodies (d) plains
- 5) We can buy road maps from _____.
- (a) bookshops (b) libraries (c) homes (d) schools

II. State whether the following statements are True or False:


- 1) The area around our home is our neighbourhood, and the people living near to our house are called neighbours. _____
- 2) A big hospital in a city can be a landmark. _____
- 3) With a road map, we can easily locate any house in the colony. _____
- 4) The language of the map remains the same all over the world. _____
- 5) Scale is a sign representing landmark. _____

III. Circle the odd one out and give a reason for it.

- a) directions colours sketch signs and symbols
- Ans: _____
- b) landmarks symbols signs neighbours
- Ans: _____
- c) north-east south west east
- Ans: _____
- d) road map colony map atlas world map
- Ans: _____

IV. Observe the map of Dan's neighbourhood carefully and help Dan solve the following questions with the help of the clue box. (some words are extra)

East, South, South-east, West, North-west









- a) Dan has to return his library books to the library. What direction does he need to follow to reach to the library from his home?

- b) After library, Dan needs to meet his friend Joe at the Mall with his mom. What direction do they need to go to meet her at the mall?

- c) Dan saw one accident in the park near the Mall. To report the incident, his mom and him went to the police station in _____ direction.

- d) The church is _____ of the Mall.
- e) What direction is Dan's house from the police station? _____

V. Observe the symbols and write what each symbol represents.

| | |
|---|--|
|  <p>a. _____</p> |  <p>b. _____</p> |
|  <p>c. _____</p> |  <p>d. _____</p> |
|  <p>e. _____</p> |  <p>f. _____</p> |

VI. If two places are 400 km away from each other and the distance between them is 4 cm on the map. What is the scale of the map? (Math Integration)

Ans: _____

